

Name:

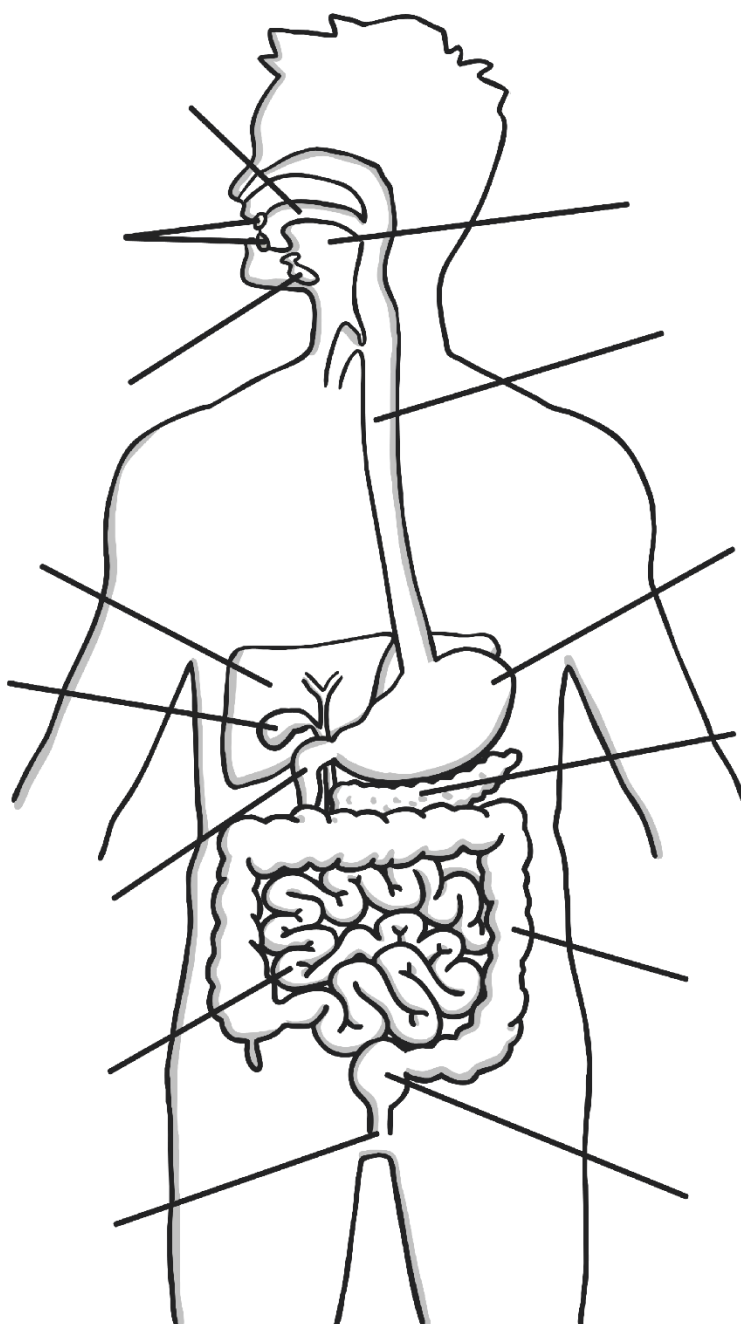
Date:

Science Assessment Year 4: Animals Including Humans



The Digestive System

1. Look at this diagram and choose 6 parts to label.



2. Join the right part of the digestive system to its job.

Part of the digestive system
Saliva
Gall bladder
Liver
Duodenum
Oesophagus

Jobs
Releases bile into the duodenum when needed.
First part of the small intestine.
Helps chew, taste or swallow.
A muscular tube which forms the path from the mouth to the stomach.
Produces bile which helps to absorb fats.

3. In the stomach, along with other parts of the body, you will find glands and enzymes:

- a) What do glands do?

- b) What do enzymes do?

3 marks


1 mark

1 mark

Total for this page

Food Chains

4. Here is a simple food chain:



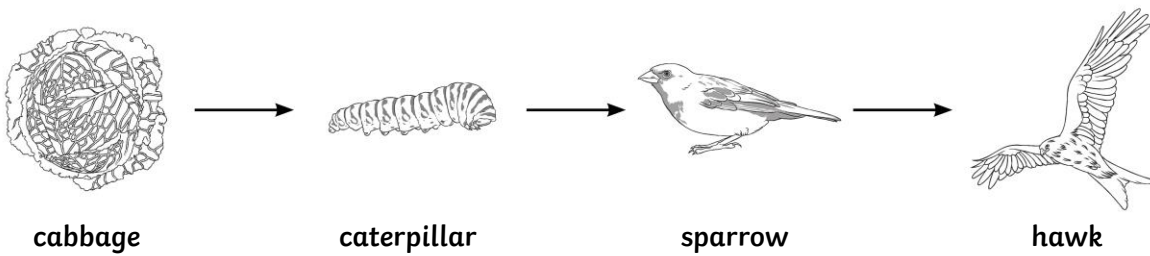
a) What do the arrows point towards?

1 mark

b) What is the name of the first plant in the food chain?

1 mark

5. Which is the tertiary consumer in this food chain?


1 mark

6. What do these words mean?

a) Herbivore

1 mark

b) Omnivore

1 mark

c) Detritivore

1 mark
Total for this page



grass



grasshopper



mouse



owl

a) Which is the predator?

1 mark

b) Which is the prey?

1 mark



Teeth

8. How many incisors does a human have?

1 mark

9. What is the function of:

a) canine teeth

b) molars

1 mark

10. What is the name of the white, outside part of the tooth?

1 mark

1 mark

Total for this page

1 mark

1 mark

Total for
this page

1 mark

1 mark

1 mark

Total for
this page

