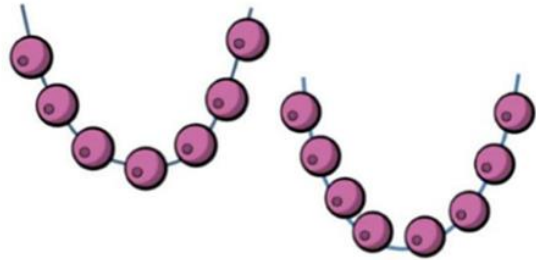


Maths Challenge Answers

Challenge 1

Sal has 20 beads.

She uses some beads to make these two necklaces.





How many beads does she have left?

Answer:

$$20 - 15 = 5$$

Challenge 2

George is thinking of a 2 digit number.



What number is George thinking of?

Answer:

45

It is 9×5 , less than 80 and $4 + 5 = 9$

Natural or Human-Made Material? Answers

Natural



Human-Made

