

## Lesson 1

Using construction resources from around your home  
(Lego or Duplo would be ideal)

Can you create a representation of these 2-digit  
numbers using sticks of 10s and ones?

25

17

38

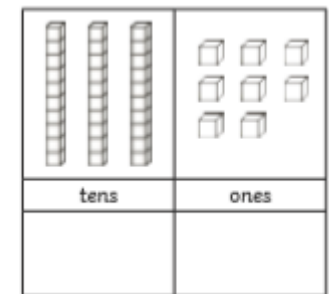
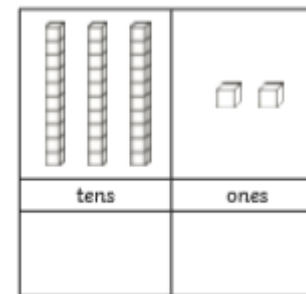
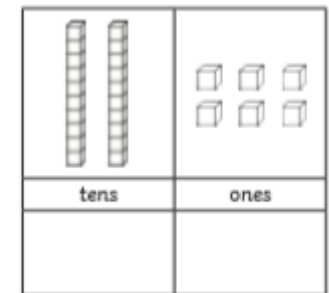
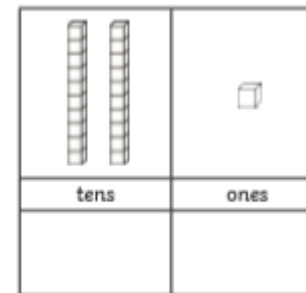
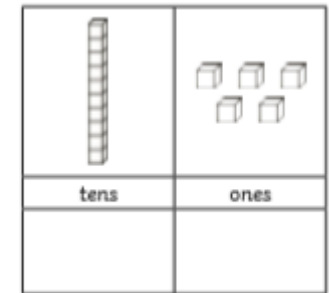
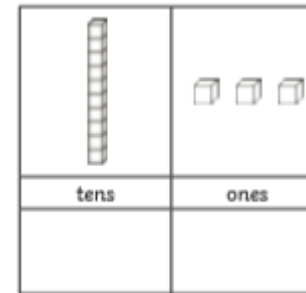
42

12

28

## Lesson 2

Can you write the correct 2-digit numbers using the  
tens and ones to help?



Lesson 3

Circle the numbers that have a 2 in the ones place.

16    27    42    78    82    34

Circle the numbers that have a 5 in the tens place.

25    57    89    34    65    54

Circle the numbers that have an 8 in the ones place.

47    82    28    56    78    61

Circle the numbers that have a 7 in the tens place.

17    59    79    83    75    56

Circle the numbers that have a 1 in the ones place.

91    37    18    51    97    13

Lesson 4

Fill in the circles with the correct number.

